

Year 2 Resources- 6th July 2020

Computing

Linked to your artwork can you use paint or another piece of software to recreate the natural work you made.

English

You have the poem 'Nature Table'. You need to read it and answer the questions based on the poem.

PDW

For these last 2 weeks of school we would like you to keep your own 'lockdown diary'.

What will you bring to the table?

Maths

This week you are going to start looking at multiplying and focusing on the 2, 5 and 10 times table.

Art/DT

You are going to start looking at the work of Andy Goldsworthy. You have some artwork to look at then a few questions to answer. Can you try to create your own piece of natural artwork?

PE

Continue with the Birmingham Schools Challenge and walking and playing in the garden.

NATURE TABLE

I'll bring in a yellow flower
with its face turned to the sky

I'll bring in cool rain
for the thirsty earth

I'll bring in late sunshine
and stars at midnight in June

I'll bring in a reed
to sing of wet places

I'll bring in the sand between my toes
from a long hot summer

I'll bring in a white cloud
to lower the sky

I'll bring in a twig
that remembers a storm

I'll bring in a holly bush
with the sharp breath of winter

I'll bring in a sleeping bulb
with the promise of spring

Comprehension Questions

1. Why might the Earth be thirsty?

2. What do all these items remind you of?

3. Why do flowers face the sun?

4. Can you find 2 adjectives that are used to describe the summer?

5. List 4 other adjectives you can spot in this poem.

Spot the pattern

Sheet 1

Can you complete the pattern and describe it?

1) 5, 10, , 20, 25, , , 40, 45,

2) 6, 8, 10, , 14, 16, , , , 24

3) , 15, , 19, , , 25, 27,

4) 9, 19, , 39, 49, , , ,

5) , , 34, 44, , 64, ,

6) 3, 8, , , 23, , , 38, 43,

Challenge

Try starting a pattern from a number > 50 . Your pattern can count on or back.

Spot the pattern

Sheet 2

Can you complete the pattern and describe it?

1) 37, , 57, 67, , , 97,

2) 16, 21, , 31, , , , 51,

3) 65, 60, , , , 40, 35, ,

4) 78, , , 48, 38, , ,

5) , 57, 55, , , 49, , , 43

6) 47, 42, , , , 22, 17, ,

Challenge

Try creating two more patterns with different-sized steps, maybe counting on or back in 3s, 4s or 7s! Can your partner work out your missing numbers?

How many 5s?

Sheet 1

How much will each of the following cost at the 5p shop?
(All items cost 5p each!)

Write the multiplication sentence for each.

Set 1

6 jelly bears _____

2 plums _____

4 cakes _____

1 ball _____

5 apples _____

3 pencils _____

Set 2

10 biscuits _____

8 bananas _____

12 pens _____

9 notepads _____

11 rubbers _____

7 cups _____

Challenge

How many items can you buy for 45p? 30p? 55p?

Andy Goldsworthy

natural materials

nature

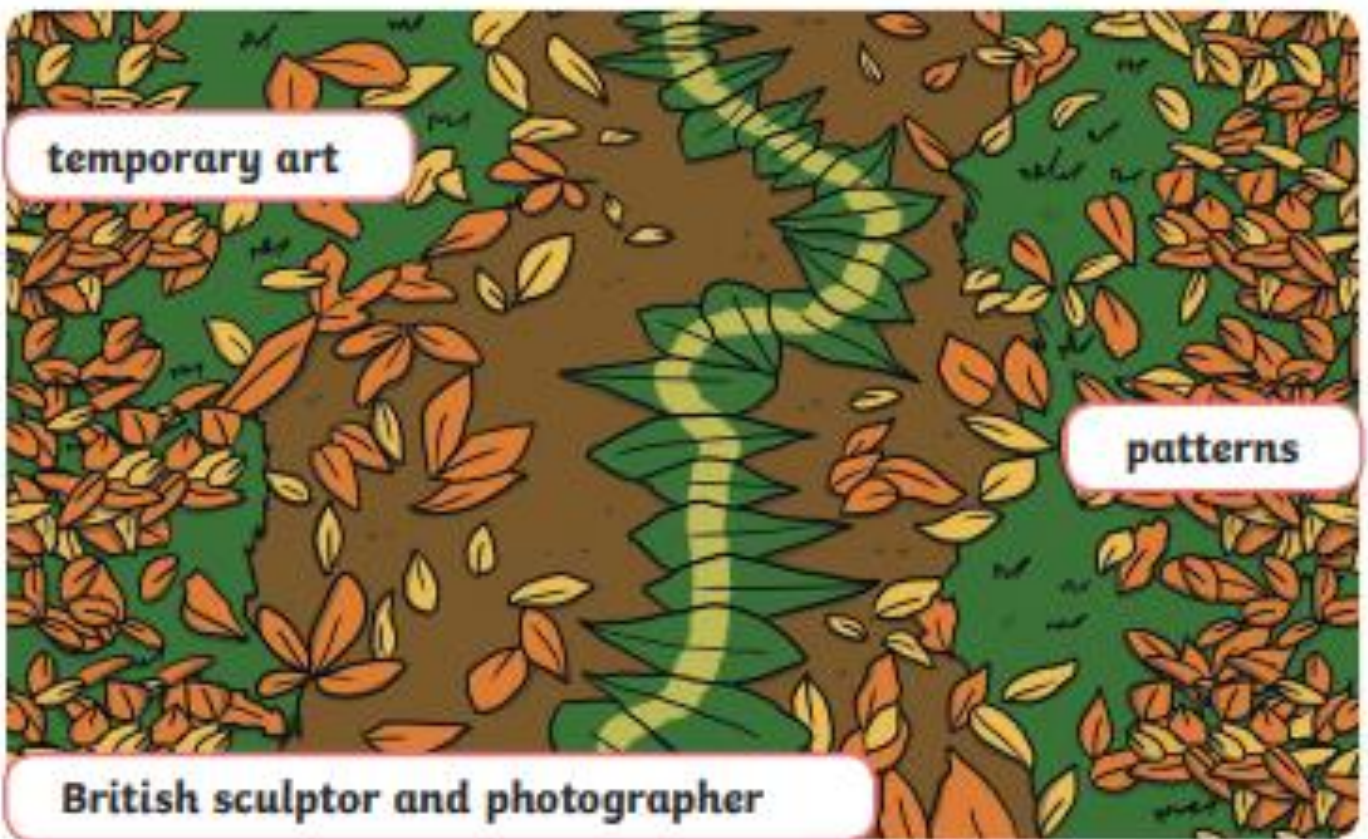
land art

colours


temporary art

patterns

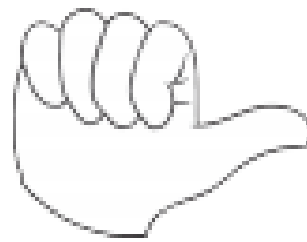
British sculptor and photographer



What I think about Andy Goldsworthy's work:



How I feel when looking at Andy Goldsworthy's work:



Use natural materials like sticks, stones, leaves, pine cones, shells and flowers to create your own artwork inspired by Andy Goldsworthy. Stick a photograph of your artwork below.

A large, empty rectangular box with a black border, intended for students to paste a photograph of their artwork.

Land Art

How many different colours of natural object can you find?



My Home Learning 2020 Diary Date _____

Three new words I learnt this week:

A B C

Monday



Three websites I enjoyed exploring:

Tuesday



The best game I played this week:



Wednesday



The best thing I saw outside:



My exercise tracker:

Colour in one picture every time you do something physical!



Thursday



Something creative I did this week:

Funniest moment of the week:



Friday

What I hope to achieve next week:

