



HILL WEST *Primary*

FOUR OAKS

Home Learning Pack

Year 3

Week beginning 03.05.2021



Home Learning Links

World Book Online

World Book online have just made their fabulous collection of over 3,000 e-books and audiobooks available for free for children to access at home. They have books suitable for all ages. Click on the following link to access them.

<https://worldbook.kitaboo.com/reader/worldbook/index.html?usertoken=Mjk5MzQ6MTpJUjA5MjAxNjoyOmNsaWVudDE2OTc6MTY5NzoyMjE2Mjg4OjE6MTU4NDM4MDExMzA2Mjp1cw%3D%3D>

Read Works.org

Read Works offers access to 3000+ comprehension for all age groups. Just sign up for a free account to access fantastic texts.

<https://www.readworks.org/>

Beanstalk

Beanstalk website is packed with lots of interactive materials for children aged 1 to 6. They are offering free access to all families during the COVID-19 pandemic.

<https://beanstalk.co/>

Twinkl

Twinkl literally have 10s of thousands of quality resources for all areas of the curriculum. What's better is they are offering a month's free access (with no subscription) for all families. Just search for a topic, e-book, spellings, arithmetic, science – the possibilities are endless.

www.twinkl.co.uk/offer

Tutortastic

An online platform with tutorials and videos for home learning.

<https://www.tutortastic.co.uk/blog/homelearning>

Education Quizzes

A series of short quizzes for children to complete related to the National Curriculum subjects. Just select KS1 for Reception, Year 1 & Year 2 and select KS2 for Years 3-6.

<https://www.educationquizzes.com/ks1/>

Top Marks

A range of activities here but especially good interactive activities for maths.

<https://www.topmarks.co.uk/>

Classroom Secrets

Classroom Secrets Kids is offering free access to everyone until the end of April 2020. The platform is aimed at primary aged children and covers subjects such as maths, reading, grammar and spelling. The platform is really child-friendly so that they're able to access it on their own. There are a load of games and interactive activities from phonics to SATs

<https://kids.classroomsecrets.co.uk/>

National Geographic

National Geographic is a great platform for learning and it's totally free. There are online games, resources and competitions, too.

<https://www.natgeokids.com/uk/teacher-category/primary-resources/>


Key Question Week 3: Are you born courageous?
Key Text for Linked Learning: Inside Out Clips
Linked Learning: English, PDW,
To begin their learning this week, the children will watch clips from the film 'Inside Out' which is a film all about the emotions we feel and how our mind can process them. Children will discuss fears that they have previously conquered and begin to identify positive ways to face new challenges, such as those that they may face in upcoming years, finding positive ways to express emotions and understand that emotions have consequences. In English, children will use the same clips from 'Inside Out' to infer the characters' feelings and thoughts at various points. Following on from this, children will explore how Riley's 'personality Islands' are central to her actions. Children will then explore what is important to them by designing and writing their own 'personality Islands'. Children will use a range of sentence types and will correctly punctuate throughout. Children will be sharing what makes them them and will show consideration to others by listening to each other and sharing experiences.
Maths: Children will revise estimating totals and adding three or four 2-digit numbers using compact addition. They will estimate the total of four 2-digit numbers; find exact totals using column addition. Children will Practise adding trios of 3-digit numbers, using either expanded or compact addition. They will estimate, then calculate, three costs that add up to £1000. Children will practise using expanded or compact addition to add amounts of money, then estimate and calculate multiple costs that add up to under £10. They will then choose items that add up to under £5, £10 or £20, they will be able to buy multiple items that add up to under £20, then calculate change.
Science: Sun Safety Week- children will specifically look at the advantages and dangers of the sun and what you should do to keep safe.
History: Using their facts from last week, the children will compare the Iron Age to the Stone Age. (to be taught at a later date)
Geography: In Geography, children will study their local area, and find Hill Hook on a map and identify where it is in relation to school, finding possible routes to get there.
Computing: Continuing on their "about me" document, children will import pictures of things that they like doing and will start to learn how to hyperlink. (to be taught at a later date)
Music: Whilst listening to Arnold Schoenberg children will create their own artwork to reflect the different emotions that they hear, thinking about how colours represent different emotions.
Art: I can take photographs of different views from the same place. Linked to Geography children will visit Hill Hook and take photos from different view points.
Design Technology: The children will explore how they can change a shadow without changing the puppet by developing their own line of enquiries. (to be taught at a later date)
PDW / R.E: See above
P.E: The children will continue to practise their golf skills.
MFL: Children will revise which French graphemes are linked to each phoneme.
Vocabulary: "The Lion, The Witch and The Wardrobe" (from chap 13) Overshadowed, thickets , brute, centaurs, presence, dewy , traitor, sceptre , obeyed, gibber

Maths

Tuesday 4th May

Using column addition to add three 3-digit numbers.

$378 + 123 + 285$



Discuss in pairs – do you think the answer is more than 1000 or less than 1000?

Who rounded the numbers to the **nearest 100**?

$400 + 100 + 300$ is only 800 so it looks like the answer will be less than 1000!

$378 + 123 + 285$

Let's check using **expanded addition**.

300	70	8
100	20	3
+	200	80 5
	100	10
<hr/>		
	700	80 6

$700 + 80 + 6 = 786$

And with the **compact method**.

378	
123	
+	285
	11
<hr/>	
	786

That's close to our estimate of 800!

Bicycles for sale

Bicycle Color	Price (£)
Yellow	259
Red	545
Silver	419
Black	325
Blue	255
Black	189
Pink	375
Teal	535
Black	119
Orange	329

© Hamilton Trust resources_add-sub_3779

A family has a budget of £1000 to buy three bikes. Which bikes can they buy? How many different combinations could they buy? They can buy the same bike more than once.

Wednesday 5th May

Estimating and adding 3-digit numbers.

Let's try £4.72 + £2.54

$$\begin{array}{r} \text{£4 } 70\text{p } 2\text{p} \\ + \text{£2 } 50\text{p } 4\text{p} \\ \hline \text{£1} \\ \text{£7 } 20\text{p } 6\text{p} \end{array}$$

$$\text{£7} + 20\text{p} + 6\text{p} = \text{£7.26}$$

$$\begin{array}{r} \text{£4.72} \\ + \text{£2.54} \\ \hline 1 \\ \text{£7.26} \end{array}$$

Who can talk through the
expanded addition?

Who can talk through the
compact addition?

Try £4.59 + £2.25 and
£4.72 + £3.59

First **estimate** the totals
to the nearest pound.

Then work out the answers
using **expanded or compact
addition.**

Whichever method you use it is
important to set the numbers
out neatly and remember to
leave a space for any extra £s
or 10ps.

Adding money

Sheet 2

Round to the nearest pound to estimate each total. Then use column addition to find the exact answer.

1. $£8.08 + £5.57$

2. $£4.29 + £6.37$

3. $£5.53 + £8.85$

4. $£1.62 + £7.48$

5. $£4.92 + £9.38$

6. $£5.61 + £8.65$

7. $£19.74 + £4.99$

8. $£16.56 + £6.83$

Thursday 6th May

Estimating and adding 3-digit numbers.

Adding pairs of 3-digit numbers

Sheet 3

1. $278 + 421$
2. $522 + 158$
3. $865 + 287$
4. $328 + 385$
5. $523 + 431$
6. $528 + 547$
7. $548 + 276$
8. $864 + 758$

Which of these additions do you think have answers of less than 1000? Work them out to check.

Which of these additions do you think have answers of more than 1000? Work them out to check.

Friday 7th May

Finding change.

Beach Shop Price List

Bucket £2.74	Spade £1.43	Beach towel £8.53	Sun cream £5.72
--------------	-------------	-------------------	-----------------

Which two items could you buy for less than £5 in total?

How much would it cost and how much change would you have from £5?

We can draw a bar model to represent this problem...

£5		
£2.74 Bucket	£1.43 Spade	?

£5		
£2.74 Bucket	£1.43 Spade	83p Change

We can use column addition to find the cost of the bucket and spade...

Then count up using Frog to find the change...

$$\begin{array}{r} £2.74 \\ + £1.43 \\ \hline 1 \\ \hline £4.17 \end{array}$$

£4.17 £4.20 £5

Beach Shop Price List

Bucket £2.74 Spade £1.43 Beach towel £8.53 Sun cream £5.72

Now find the cost of the sun cream and spade, then the change from £10.



Draw up a **bar model** first.

£10		
£5.72 Sun cream	£1.43 Spade	£2.85 Change

Let's check. First add the sun cream and spade.

Then count up using Frog to find the change...

$$\begin{array}{r} £5.72 \\ + £1.43 \\ \hline 1 \\ \hline £7.15 \end{array}$$





You have £10 to spend at the beach shop. You can buy two or three items at a time.

1. Add the prices together to find the cost.
2. Use subtraction to calculate the amount of change you will receive.
3. Repeat this to find as many combinations as possible.

Work out the missing numbers in this addition puzzle:

$$\begin{array}{r}
 \text{£}4 \quad \square \text{p} \quad 8\text{p} \\
 \text{£}7 \quad 80\text{p} \quad \square \text{p} \\
 \hline
 \text{£} \square \quad 60\text{p} \quad 1\text{p}
 \end{array}$$

Science

Wednesday 5th May

Sun Safety Week

UV Light

The sun emits (gives out) rays of light.

We can't see all the types of light that come from the sun.

The visible spectrum is the name for the light that we can see, and is made up of the colours of the rainbow:



Another type of light that the sun emits is called UV light.

UV light is invisible to humans, but we can see and feel its effects.

UV Light

Some UV rays are blocked by the ozone layer, but most of the UV light from the sun reaches us on earth.

The amount of UV light that reaches us depends on different things.

It is stronger at midday and in the summer.

If there are no clouds there is more UV light.

It also gets stronger nearer to the equator.

The location can make a difference too - water, sand and snow all reflect UV light, making it stronger.

UV light causes sun burn, wrinkles and skin cancer, damages the eyes and can change the colour of some materials.

1. Cut out several shapes from black card.
2. Place them on a piece of coloured paper, and position them in a sunny spot for a week.
3. When you take the shapes off, you should see that the paper around the shapes has changed colour slightly.
4. The paper under the shapes will still look the same.
5. The UV light could not get to the paper under the shapes, so the paper under the shapes has not been damaged by the UV rays.

The eye is made to let light in; this is how we see.

Look in the mirror. **Can you identify your pupil?** It looks like a black circle.

Light enters the eye through the pupil.

Look closely at your pupil in the mirror. Close your eyes for 30 seconds, then open them and look at your pupil. **What do you notice?**

The pupil grows bigger in the dark to allow more light to enter the eye, and gets smaller in bright light.



To protect your skin from UV rays, you can cover up or wear sun cream.
But what can you do to protect your eyes?

There are several things you should do to protect your eyes from the sun or other bright lights.

- You should wear sunglasses when out in the sun. Sunglasses have a UV rating to show how well they block UV rays. Make sure you get sunglasses with a high UV rating.
- Some sunglasses don't have a UV rating - these are really just toy sunglasses and don't protect your eyes. In fact, because they have dark lenses but no UV filter, the pupil opens wider, actually letting in more UV rays!



How Can We Protect Ourselves?



Slip on protective clothing, such as shirts with long sleeves and collars. Cover as much skin as possible.



Slop on sunscreen that is SPF30 or higher. Put it on at least 20 minutes before going outside, and re-apply every 2 hours.



Slap on a hat. Make sure it protects your face, nose, neck and ears. Wear sunglasses for extra protection.



Seek shade. Bring your own umbrella or rest under a tree or shelter.

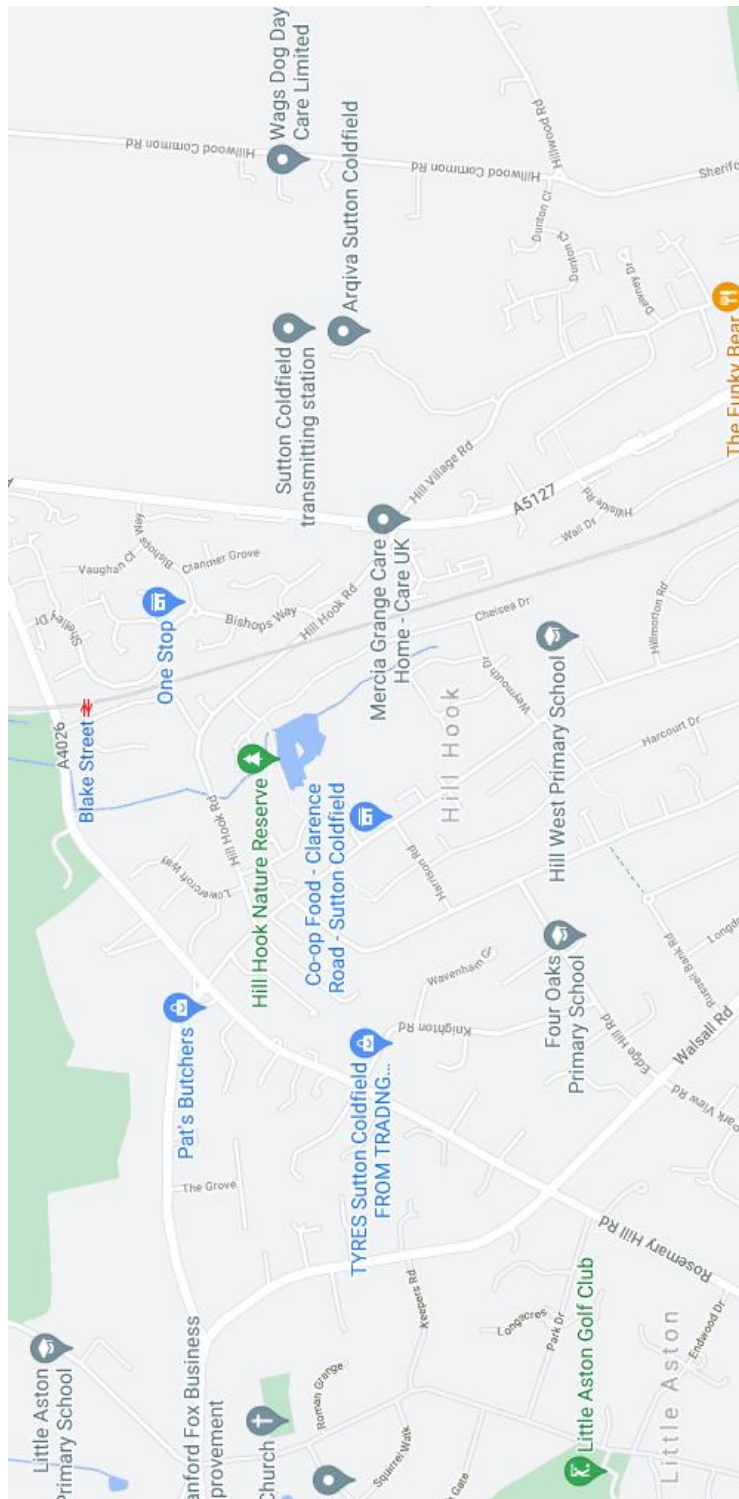
Your task:
Create a poster informing children of the dangers of the sun and ways they can enjoy the sun safely.

Geography

Tuesday 5th May

Reading maps

Use the map below to plot a route from Hill West Primary School to Hill Hook Nature Reserve. During our visit, we will be taking photos from different viewpoints. Can you take photos of your local area?



PDW

Wednesday 6th May

Facing fears

What is fear?

Watch this short video:

<https://www.youtube.com/watch?v=2strQAiM0iA>

With somebody in your house, discuss the following questions:

Is there a time when you have felt fearful of something?

What were you fearful of?


How did your body tell you that you were scared?

How did you overcome that fear?


How did you feel afterwards?

You'll probably find that you have been fearful of different things to others – that's ok! It makes us all different.

Here are some ways to cope when you are feeling scared.



These might not work for you, because we're all different. Create your own mind map of the ways you can cope when you're feeling scared.



Music

Friday 7th May

Expressionism in art and music

What is expressionism?

The term expressionism was originally used in art. Artists created vivid picturesm distorting images to create unrealistic images that suggested strong emotions.



Can you find the root word in expressionism?

Here are more pieces of expressionist artwork:

<https://www.wassilykandinsky.net/painting1896-1944.php>



What do you notice about the colours of the characters?

Listen carefully to the first three minutes of Pierrot Lunaire by Arnold Schoenberg

<https://www.youtube.com/watch?v=vQVkbKULKpl>

How does this piece make you feel?

Create your own piece of expressionist art inspired Pierrot Lunaire. Your art should display the emotions you have whilst listening – think carefully about the colours you choose.

English

The screenshot shows a presentation slide in the ActivInspire Studio application. The slide has a blue vertical bar on the left. The title 'Tuesday 4th May Vocabulary' is written in blue, underlined text. Below the title, the questions 'Who has seen the movie?' and 'What is it about?' are written in blue. To the right of the text is a poster for the movie 'Inside Out'. The poster features a black silhouette of a head filled with colorful characters representing emotions: Joy (yellow), Sadness (blue), Anger (red), Fear (green), and Disgust (purple). The text 'INSIDE OUT' is at the top, and 'EVERY DAY IS FULL OF Emotions' is at the bottom. The application's interface, including the menu bar, toolbar, and Windows taskbar, is visible around the slide.

ActivInspire - Studio


File Edit View Insert Tools Help English spelling spag

Comic Sans MS 38 B I U T⁺ T₊ T₋ T⁻ T₋ [Color Picker] [Eraser] [Lasso] [Text] [Image] [Table] [List] [Link] [Unlink] [Zoom In] [Zoom Out] [Fit] [Reset]

Page 1 of 10 Best Fit

Tuesday 4th May Vocabulary

Who has seen the movie?
What is it about?



INSIDE OUT

EVERY DAY IS FULL OF Emotions

Windows taskbar: 15:42 28/04/2021

ActivInspire - Studio

File Edit View Insert Tools Help English spelling spag Page 3 of 10 Best Fit

Comic Sans MS 38 B I U T² T³ T⁴ T⁵ T⁶ T⁷ T⁸ T⁹ T¹⁰ T¹¹ T¹² T¹³ T¹⁴ T¹⁵ T¹⁶ T¹⁷ T¹⁸ T¹⁹ T²⁰ T²¹ T²² T²³ T²⁴ T²⁵ T²⁶ T²⁷ T²⁸ T²⁹ T³⁰ T³¹ T³² T³³ T³⁴ T³⁵ T³⁶ T³⁷ T³⁸ T³⁹ T⁴⁰ T⁴¹ T⁴² T⁴³ T⁴⁴ T⁴⁵ T⁴⁶ T⁴⁷ T⁴⁸ T⁴⁹ T⁵⁰ T⁵¹ T⁵² T⁵³ T⁵⁴ T⁵⁵ T⁵⁶ T⁵⁷ T⁵⁸ T⁵⁹ T⁶⁰ T⁶¹ T⁶² T⁶³ T⁶⁴ T⁶⁵ T⁶⁶ T⁶⁷ T⁶⁸ T⁶⁹ T⁷⁰ T⁷¹ T⁷² T⁷³ T⁷⁴ T⁷⁵ T⁷⁶ T⁷⁷ T⁷⁸ T⁷⁹ T⁸⁰ T⁸¹ T⁸² T⁸³ T⁸⁴ T⁸⁵ T⁸⁶ T⁸⁷ T⁸⁸ T⁸⁹ T⁹⁰ T⁹¹ T⁹² T⁹³ T⁹⁴ T⁹⁵ T⁹⁶ T⁹⁷ T⁹⁸ T⁹⁹ T¹⁰⁰ T¹⁰¹ T¹⁰² T¹⁰³ T¹⁰⁴ T¹⁰⁵ T¹⁰⁶ T¹⁰⁷ T¹⁰⁸ T¹⁰⁹ T¹¹⁰ T¹¹¹ T¹¹² T¹¹³ T¹¹⁴ T¹¹⁵ T¹¹⁶ T¹¹⁷ T¹¹⁸ T¹¹⁹ T¹²⁰ T¹²¹ T¹²² T¹²³ T¹²⁴ T¹²⁵ T¹²⁶ T¹²⁷ T¹²⁸ T¹²⁹ T¹³⁰ T¹³¹ T¹³² T¹³³ T¹³⁴ T¹³⁵ T¹³⁶ T¹³⁷ T¹³⁸ T¹³⁹ T¹⁴⁰ T¹⁴¹ T¹⁴² T¹⁴³ T¹⁴⁴ T¹⁴⁵ T¹⁴⁶ T¹⁴⁷ T¹⁴⁸ T¹⁴⁹ T¹⁵⁰ T¹⁵¹ T¹⁵² T¹⁵³ T¹⁵⁴ T¹⁵⁵ T¹⁵⁶ T¹⁵⁷ T¹⁵⁸ T¹⁵⁹ T¹⁶⁰ T¹⁶¹ T¹⁶² T¹⁶³ T¹⁶⁴ T¹⁶⁵ T¹⁶⁶ T¹⁶⁷ T¹⁶⁸ T¹⁶⁹ T¹⁷⁰ T¹⁷¹ T¹⁷² T¹⁷³ T¹⁷⁴ T¹⁷⁵ T¹⁷⁶ T¹⁷⁷ T¹⁷⁸ T¹⁷⁹ T¹⁸⁰ T¹⁸¹ T¹⁸² T¹⁸³ T¹⁸⁴ T¹⁸⁵ T¹⁸⁶ T¹⁸⁷ T¹⁸⁸ T¹⁸⁹ T¹⁹⁰ T¹⁹¹ T¹⁹² T¹⁹³ T¹⁹⁴ T¹⁹⁵ T¹⁹⁶ T¹⁹⁷ T¹⁹⁸ T¹⁹⁹ T²⁰⁰ T²⁰¹ T²⁰² T²⁰³ T²⁰⁴ T²⁰⁵ T²⁰⁶ T²⁰⁷ T²⁰⁸ T²⁰⁹ T²¹⁰ T²¹¹ T²¹² T²¹³ T²¹⁴ T²¹⁵ T²¹⁶ T²¹⁷ T²¹⁸ T²¹⁹ T²²⁰ T²²¹ T²²² T²²³ T²²⁴ T²²⁵ T²²⁶ T²²⁷ T²²⁸ T²²⁹ T²³⁰ T²³¹ T²³² T²³³ T²³⁴ T²³⁵ T²³⁶ T²³⁷ T²³⁸ T²³⁹ T²⁴⁰ T²⁴¹ T²⁴² T²⁴³ T²⁴⁴ T²⁴⁵ T²⁴⁶ T²⁴⁷ T²⁴⁸ T²⁴⁹ T²⁵⁰ T²⁵¹ T²⁵² T²⁵³ T²⁵⁴ T²⁵⁵ T²⁵⁶ T²⁵⁷ T²⁵⁸ T²⁵⁹ T²⁶⁰ T²⁶¹ T²⁶² T²⁶³ T²⁶⁴ T²⁶⁵ T²⁶⁶ T²⁶⁷ T²⁶⁸ T²⁶⁹ T²⁷⁰ T²⁷¹ T²⁷² T²⁷³ T²⁷⁴ T²⁷⁵ T²⁷⁶ T²⁷⁷ T²⁷⁸ T²⁷⁹ T²⁸⁰ T²⁸¹ T²⁸² T²⁸³ T²⁸⁴ T²⁸⁵ T²⁸⁶ T²⁸⁷ T²⁸⁸ T²⁸⁹ T²⁹⁰ T²⁹¹ T²⁹² T²⁹³ T²⁹⁴ T²⁹⁵ T²⁹⁶ T²⁹⁷ T²⁹⁸ T²⁹⁹ T³⁰⁰ T³⁰¹ T³⁰² T³⁰³ T³⁰⁴ T³⁰⁵ T³⁰⁶ T³⁰⁷ T³⁰⁸ T³⁰⁹ T³¹⁰ T³¹¹ T³¹² T³¹³ T³¹⁴ T³¹⁵ T³¹⁶ T³¹⁷ T³¹⁸ T³¹⁹ T³²⁰ T³²¹ T³²² T³²³ T³²⁴ T³²⁵ T³²⁶ T³²⁷ T³²⁸ T³²⁹ T³³⁰ T³³¹ T³³² T³³³ T³³⁴ T³³⁵ T³³⁶ T³³⁷ T³³⁸ T³³⁹ T³⁴⁰ T³⁴¹ T³⁴² T³⁴³ T³⁴⁴ T³⁴⁵ T³⁴⁶ T³⁴⁷ T³⁴⁸ T³⁴⁹ T³⁵⁰ T³⁵¹ T³⁵² T³⁵³ T³⁵⁴ T³⁵⁵ T³⁵⁶ T³⁵⁷ T³⁵⁸ T³⁵⁹ T³⁶⁰ T³⁶¹ T³⁶² T³⁶³ T³⁶⁴ T³⁶⁵ T³⁶⁶ T³⁶⁷ T³⁶⁸ T³⁶⁹ T³⁷⁰ T³⁷¹ T³⁷² T³⁷³ T³⁷⁴ T³⁷⁵ T³⁷⁶ T³⁷⁷ T³⁷⁸ T³⁷⁹ T³⁸⁰ T³⁸¹ T³⁸² T³⁸³ T³⁸⁴ T³⁸⁵ T³⁸⁶ T³⁸⁷ T³⁸⁸ T³⁸⁹ T³⁹⁰ T³⁹¹ T³⁹² T³⁹³ T³⁹⁴ T³⁹⁵ T³⁹⁶ T³⁹⁷ T³⁹⁸ T³⁹⁹ T⁴⁰⁰ T⁴⁰¹ T⁴⁰² T⁴⁰³ T⁴⁰⁴ T⁴⁰⁵ T⁴⁰⁶ T⁴⁰⁷ T⁴⁰⁸ T⁴⁰⁹ T⁴¹⁰ T⁴¹¹ T⁴¹² T⁴¹³ T⁴¹⁴ T⁴¹⁵ T⁴¹⁶ T⁴¹⁷ T⁴¹⁸ T⁴¹⁹ T⁴²⁰ T⁴²¹ T⁴²² T⁴²³ T⁴²⁴ T⁴²⁵ T⁴²⁶ T⁴²⁷ T⁴²⁸ T⁴²⁹ T⁴³⁰ T⁴³¹ T⁴³² T⁴³³ T⁴³⁴ T⁴³⁵ T⁴³⁶ T⁴³⁷ T⁴³⁸ T⁴³⁹ T⁴⁴⁰ T⁴⁴¹ T⁴⁴² T⁴⁴³ T⁴⁴⁴ T⁴⁴⁵ T⁴⁴⁶ T⁴⁴⁷ T⁴⁴⁸ T⁴⁴⁹ T⁴⁵⁰ T⁴⁵¹ T⁴⁵² T⁴⁵³ T⁴⁵⁴ T⁴⁵⁵ T⁴⁵⁶ T⁴⁵⁷ T⁴⁵⁸ T⁴⁵⁹ T⁴⁶⁰ T⁴⁶¹ T⁴⁶² T⁴⁶³ T⁴⁶⁴ T⁴⁶⁵ T⁴⁶⁶ T⁴⁶⁷ T⁴⁶⁸ T⁴⁶⁹ T⁴⁷⁰ T⁴⁷¹ T⁴⁷² T⁴⁷³ T⁴⁷⁴ T⁴⁷⁵ T⁴⁷⁶ T⁴⁷⁷ T⁴⁷⁸ T⁴⁷⁹ T⁴⁸⁰ T⁴⁸¹ T⁴⁸² T⁴⁸³ T⁴⁸⁴ T⁴⁸⁵ T⁴⁸⁶ T⁴⁸⁷ T⁴⁸⁸ T⁴⁸⁹ T⁴⁹⁰ T⁴⁹¹ T⁴⁹² T⁴⁹³ T⁴⁹⁴ T⁴⁹⁵ T⁴⁹⁶ T⁴⁹⁷ T⁴⁹⁸ T⁴⁹⁹ T⁵⁰⁰ T⁵⁰¹ T⁵⁰² T⁵⁰³ T⁵⁰⁴ T⁵⁰⁵ T⁵⁰⁶ T⁵⁰⁷ T⁵⁰⁸ T⁵⁰⁹ T⁵¹⁰ T⁵¹¹ T⁵¹² T⁵¹³ T⁵¹⁴ T⁵¹⁵ T⁵¹⁶ T⁵¹⁷ T⁵¹⁸ T⁵¹⁹ T⁵²⁰ T⁵²¹ T⁵²² T⁵²³ T⁵²⁴ T⁵²⁵ T⁵²⁶ T⁵²⁷ T⁵²⁸ T⁵²⁹ T⁵³⁰ T⁵³¹ T⁵³² T⁵³³ T⁵³⁴ T⁵³⁵ T⁵³⁶ T⁵³⁷ T⁵³⁸ T⁵³⁹ T⁵⁴⁰ T⁵⁴¹ T⁵⁴² T⁵⁴³ T⁵⁴⁴ T⁵⁴⁵ T⁵⁴⁶ T⁵⁴⁷ T⁵⁴⁸ T⁵⁴⁹ T⁵⁵⁰ T⁵⁵¹ T⁵⁵² T⁵⁵³ T⁵⁵⁴ T⁵⁵⁵ T⁵⁵⁶ T⁵⁵⁷ T⁵⁵⁸ T⁵⁵⁹ T⁵⁶⁰ T⁵⁶¹ T⁵⁶² T⁵⁶³ T⁵⁶⁴ T⁵⁶⁵ T⁵⁶⁶ T⁵⁶⁷ T⁵⁶⁸ T⁵⁶⁹ T⁵⁷⁰ T⁵⁷¹ T⁵⁷² T⁵⁷³ T⁵⁷⁴ T⁵⁷⁵ T⁵⁷⁶ T⁵⁷⁷ T⁵⁷⁸ T⁵⁷⁹ T⁵⁸⁰ T⁵⁸¹ T⁵⁸² T⁵⁸³ T⁵⁸⁴ T⁵⁸⁵ T⁵⁸⁶ T⁵⁸⁷ T⁵⁸⁸ T⁵⁸⁹ T⁵⁹⁰ T⁵⁹¹ T⁵⁹² T⁵⁹³ T⁵⁹⁴ T⁵⁹⁵ T⁵⁹⁶ T⁵⁹⁷ T⁵⁹⁸ T⁵⁹⁹ T⁶⁰⁰ T⁶⁰¹ T⁶⁰² T⁶⁰³ T⁶⁰⁴ T⁶⁰⁵ T⁶⁰⁶ T⁶⁰⁷ T⁶⁰⁸ T⁶⁰⁹ T⁶¹⁰ T⁶¹¹ T⁶¹² T⁶¹³ T⁶¹⁴ T⁶¹⁵ T⁶¹⁶ T⁶¹⁷ T⁶¹⁸ T⁶¹⁹ T⁶²⁰ T⁶²¹ T⁶²² T⁶²³ T⁶²⁴ T⁶²⁵ T⁶²⁶ T⁶²⁷ T⁶²⁸ T⁶²⁹ T⁶³⁰ T⁶³¹ T⁶³² T⁶³³ T⁶³⁴ T⁶³⁵ T⁶³⁶ T⁶³⁷ T⁶³⁸ T⁶³⁹ T⁶⁴⁰ T⁶⁴¹ T⁶⁴² T⁶⁴³ T⁶⁴⁴ T⁶⁴⁵ T⁶⁴⁶ T⁶⁴⁷ T⁶⁴⁸ T⁶⁴⁹ T⁶⁵⁰ T⁶⁵¹ T⁶⁵² T⁶⁵³ T⁶⁵⁴ T⁶⁵⁵ T⁶⁵⁶ T⁶⁵⁷ T⁶⁵⁸ T⁶⁵⁹ T⁶⁶⁰ T⁶⁶¹ T⁶⁶² T⁶⁶³ T⁶⁶⁴ T⁶⁶⁵ T⁶⁶⁶ T⁶⁶⁷ T⁶⁶⁸ T⁶⁶⁹ T⁶⁷⁰ T⁶⁷¹ T⁶⁷² T⁶⁷³ T⁶⁷⁴ T⁶⁷⁵ T⁶⁷⁶ T⁶⁷⁷ T⁶⁷⁸ T⁶⁷⁹ T⁶⁸⁰ T⁶⁸¹ T⁶⁸² T⁶⁸³ T⁶⁸⁴ T⁶⁸⁵ T⁶⁸⁶ T⁶⁸⁷ T⁶⁸⁸ T⁶⁸⁹ T⁶⁹⁰ T⁶⁹¹ T⁶⁹² T⁶⁹³ T⁶⁹⁴ T⁶⁹⁵ T⁶⁹⁶ T⁶⁹⁷ T⁶⁹⁸ T⁶⁹⁹ T⁷⁰⁰ T⁷⁰¹ T⁷⁰² T⁷⁰³ T⁷⁰⁴ T⁷⁰⁵ T⁷⁰⁶ T⁷⁰⁷ T⁷⁰⁸ T⁷⁰⁹ T⁷¹⁰ T⁷¹¹ T⁷¹² T⁷¹³ T⁷¹⁴ T⁷¹⁵ T⁷¹⁶ T⁷¹⁷ T⁷¹⁸ T⁷¹⁹ T⁷²⁰ T⁷²¹ T⁷²² T⁷²³ T⁷²⁴ T⁷²⁵ T⁷²⁶ T⁷²⁷ T⁷²⁸ T⁷²⁹ T⁷³⁰ T⁷³¹ T⁷³² T⁷³³ T⁷³⁴ T⁷³⁵ T⁷³⁶ T⁷³⁷ T⁷³⁸ T⁷³⁹ T⁷⁴⁰ T⁷⁴¹ T⁷⁴² T⁷⁴³ T⁷⁴⁴ T⁷⁴⁵ T⁷⁴⁶ T⁷⁴⁷ T⁷⁴⁸ T⁷⁴⁹ T⁷⁵⁰ T⁷⁵¹ T⁷⁵² T⁷⁵³ T⁷⁵⁴ T⁷⁵⁵ T⁷⁵⁶ T⁷⁵⁷ T⁷⁵⁸ T⁷⁵⁹ T⁷⁶⁰ T⁷⁶¹ T⁷⁶² T⁷⁶³ T⁷⁶⁴ T⁷⁶⁵ T⁷⁶⁶ T⁷⁶⁷ T⁷⁶⁸ T⁷⁶⁹ T⁷⁷⁰ T⁷⁷¹ T⁷⁷² T⁷⁷³ T⁷⁷⁴ T⁷⁷⁵ T⁷⁷⁶ T⁷⁷⁷ T⁷⁷⁸ T⁷⁷⁹ T⁷⁸⁰ T⁷⁸¹ T⁷⁸² T⁷⁸³ T⁷⁸⁴ T⁷⁸⁵ T⁷⁸⁶ T⁷⁸⁷ T⁷⁸⁸ T⁷⁸⁹ T⁷⁹⁰ T⁷⁹¹ T⁷⁹² T⁷⁹³ T⁷⁹⁴ T⁷⁹⁵ T⁷⁹⁶ T⁷⁹⁷ T⁷⁹⁸ T⁷⁹⁹ T⁸⁰⁰ T⁸⁰¹ T⁸⁰² T⁸⁰³ T⁸⁰⁴ T⁸⁰⁵ T⁸⁰⁶ T⁸⁰⁷ T⁸⁰⁸ T⁸⁰⁹ T⁸¹⁰ T⁸¹¹ T⁸¹² T⁸¹³ T⁸¹⁴ T⁸¹⁵ T⁸¹⁶ T⁸¹⁷ T⁸¹⁸ T⁸¹⁹ T⁸²⁰ T⁸²¹ T⁸²² T⁸²³ T⁸²⁴ T⁸²⁵ T⁸²⁶ T⁸²⁷ T⁸²⁸ T⁸²⁹ T⁸³⁰ T⁸³¹ T⁸³² T⁸³³ T⁸³⁴ T⁸³⁵ T⁸³⁶ T⁸³⁷ T⁸³⁸ T⁸³⁹ T⁸⁴⁰ T⁸⁴¹ T⁸⁴² T⁸⁴³ T⁸⁴⁴ T⁸⁴⁵ T⁸⁴⁶ T⁸⁴⁷ T⁸⁴⁸ T⁸⁴⁹ T⁸⁵⁰ T⁸⁵¹ T⁸⁵² T⁸⁵³ T⁸⁵⁴ T⁸⁵⁵ T⁸⁵⁶ T⁸⁵⁷ T⁸⁵⁸ T⁸⁵⁹ T⁸⁶⁰ T⁸⁶¹ T⁸⁶² T⁸⁶³ T⁸⁶⁴ T⁸⁶⁵ T⁸⁶⁶ T⁸⁶⁷ T⁸⁶⁸ T⁸⁶⁹ T⁸⁷⁰ T⁸⁷¹ T⁸⁷² T⁸⁷³ T⁸⁷⁴ T⁸⁷⁵ T⁸⁷⁶ T⁸⁷⁷ T⁸⁷⁸ T⁸⁷⁹ T⁸⁸⁰ T⁸⁸¹ T⁸⁸² T⁸⁸³ T⁸⁸⁴ T⁸⁸⁵ T⁸⁸⁶ T⁸⁸⁷ T⁸⁸⁸ T⁸⁸⁹ T⁸⁹⁰ T⁸⁹¹ T⁸⁹² T⁸⁹³ T⁸⁹⁴ T⁸⁹⁵ T⁸⁹⁶ T⁸⁹⁷ T⁸⁹⁸ T⁸⁹⁹ T⁹⁰⁰ T⁹⁰¹ T⁹⁰² T⁹⁰³ T⁹⁰⁴ T⁹⁰⁵ T⁹⁰⁶ T⁹⁰⁷ T⁹⁰⁸ T⁹⁰⁹ T⁹¹⁰ T⁹¹¹ T⁹¹² T⁹¹³ T⁹¹⁴ T⁹¹⁵ T⁹¹⁶ T⁹¹⁷ T⁹¹⁸ T⁹¹⁹ T⁹²⁰ T⁹²¹ T⁹²² T⁹²³ T⁹²⁴ T⁹²⁵ T⁹²⁶ T⁹²⁷ T⁹²⁸ T⁹²⁹ T⁹³⁰ T⁹³¹ T⁹³² T⁹³³ T⁹³⁴ T⁹³⁵ T⁹³⁶ T⁹³⁷ T⁹³⁸ T⁹³⁹ T⁹⁴⁰ T⁹⁴¹ T⁹⁴² T⁹⁴³ T⁹⁴⁴ T⁹⁴⁵ T⁹⁴⁶ T⁹⁴⁷ T⁹⁴⁸ T⁹⁴⁹ T⁹⁵⁰ T⁹⁵¹ T⁹⁵² T⁹⁵³ T⁹⁵⁴ T⁹⁵⁵ T⁹⁵⁶ T⁹⁵⁷ T⁹⁵⁸ T⁹⁵⁹ T⁹⁶⁰ T⁹⁶¹ T⁹⁶² T⁹⁶³ T⁹⁶⁴ T⁹⁶⁵ T⁹⁶⁶ T⁹⁶⁷ T⁹⁶⁸ T⁹⁶⁹ T⁹⁷⁰ T⁹⁷¹ T⁹⁷² T⁹⁷³ T⁹⁷⁴ T⁹⁷⁵ T⁹⁷⁶ T⁹⁷⁷ T⁹⁷⁸ T⁹⁷⁹ T⁹⁸⁰ T⁹⁸¹ T⁹⁸² T⁹⁸³ T⁹⁸⁴ T⁹⁸⁵ T⁹⁸⁶ T⁹⁸⁷ T⁹⁸⁸ T⁹⁸⁹ T⁹⁹⁰ T⁹⁹¹ T⁹⁹² T⁹⁹³ T⁹⁹⁴ T⁹⁹⁵ T⁹⁹⁶ T⁹⁹⁷ T⁹⁹⁸ T⁹⁹⁹ T¹⁰⁰⁰ T¹⁰⁰¹ T¹⁰⁰² T¹⁰⁰³ T¹⁰⁰⁴ T¹⁰⁰⁵ T¹⁰⁰⁶ T¹⁰⁰⁷ T¹⁰⁰⁸ T¹⁰⁰⁹ T¹⁰¹⁰ T¹⁰¹¹ T¹⁰¹² T¹⁰¹³ T¹⁰¹⁴ T¹⁰¹⁵ T¹⁰¹⁶ T¹⁰¹⁷ T¹⁰¹⁸ T¹⁰¹⁹ T¹⁰²⁰ T¹⁰²¹ T¹⁰²² T¹⁰²³ T¹⁰²⁴ T¹⁰²⁵ T¹⁰²⁶ T¹⁰²⁷ T¹⁰²⁸ T¹⁰²⁹ T¹⁰³⁰ T¹⁰³¹ T¹⁰³² T¹⁰³³ T¹⁰³⁴ T¹⁰³⁵ T¹⁰³⁶ T¹⁰³⁷ T¹⁰³⁸ T¹⁰³⁹ T¹⁰⁴⁰ T¹⁰⁴¹ T¹⁰⁴² T¹⁰⁴³ T¹⁰⁴⁴ T¹⁰⁴⁵ T¹⁰⁴⁶ T¹⁰⁴⁷ T¹⁰⁴⁸ T¹⁰⁴⁹ T¹⁰⁵⁰ T¹⁰⁵¹ T¹⁰⁵² T¹⁰⁵³ T¹⁰⁵⁴ T¹⁰⁵⁵ T¹⁰⁵⁶ T¹⁰⁵⁷ T¹⁰⁵⁸ T¹⁰⁵⁹ T¹⁰⁶⁰ T¹⁰⁶¹ T¹⁰⁶² T¹⁰⁶³ T¹⁰⁶⁴ T¹⁰⁶⁵ T¹⁰⁶⁶ T¹⁰⁶⁷ T¹⁰⁶⁸ T¹⁰⁶⁹ T¹⁰⁷⁰ T¹⁰⁷¹ T¹⁰⁷² T¹⁰⁷³ T¹⁰⁷⁴ T¹⁰⁷⁵ T¹⁰⁷⁶ T¹⁰⁷⁷ T¹⁰⁷⁸ T¹⁰⁷⁹ T¹⁰⁸⁰ T¹⁰⁸¹ T¹⁰⁸² T¹⁰⁸³ T¹⁰⁸⁴ T¹⁰⁸⁵ T¹⁰⁸⁶ T¹⁰⁸⁷ T¹⁰⁸⁸ T¹⁰⁸⁹ T¹⁰⁹⁰ T¹⁰⁹¹ T¹⁰⁹² T¹⁰⁹³ T¹⁰⁹⁴ T¹⁰⁹⁵ T¹⁰⁹⁶ T¹⁰⁹⁷ T¹⁰⁹⁸ T¹⁰⁹⁹ T¹¹⁰⁰ T¹¹⁰¹ T¹¹⁰² T¹¹⁰³ T¹¹⁰⁴ T¹¹⁰⁵ T¹¹⁰⁶ T¹¹⁰⁷ T¹¹⁰⁸ T¹¹⁰⁹ T¹¹¹⁰ T¹¹¹¹ T¹¹¹² T¹¹¹³ T¹¹¹⁴ T¹¹¹⁵ T¹¹¹⁶ T¹¹¹⁷ T¹¹¹⁸ T¹¹¹⁹ T¹¹²⁰ T¹¹²¹ T¹¹²² T¹¹²³ T¹¹²⁴ T¹¹²⁵ T¹¹²⁶ T¹¹²⁷ T¹¹²⁸ T¹¹²⁹ T¹¹³⁰ T¹¹³¹ T¹¹³² T¹¹³³ T¹¹³⁴ T¹¹³⁵ T¹¹³⁶ T¹¹³⁷ T¹¹³⁸ T¹¹³⁹ T¹¹⁴⁰ T¹¹⁴¹ T¹¹⁴² T¹¹⁴³ T¹¹⁴⁴ T¹¹⁴⁵ T¹¹⁴⁶ T¹¹⁴⁷ T¹¹⁴⁸ T¹¹⁴⁹ T¹¹⁵⁰ T¹¹⁵¹ T¹¹⁵² T¹¹⁵³ T¹¹⁵⁴ T¹¹⁵⁵ T¹¹⁵⁶ T¹¹⁵⁷ T¹¹⁵⁸ T¹¹⁵⁹ T¹¹⁶⁰ T¹¹⁶¹ T¹¹⁶² T¹¹⁶³ T¹¹⁶⁴ T¹¹⁶⁵ T¹¹⁶⁶ T¹¹⁶⁷ T¹¹⁶⁸ T¹¹⁶⁹ T¹¹⁷⁰ T¹¹⁷¹ T¹¹⁷² T¹¹⁷³ T¹¹⁷⁴ T¹¹⁷⁵ T¹¹⁷⁶ T¹¹⁷⁷ T¹¹⁷⁸ T¹¹⁷⁹ T¹¹⁸⁰ T¹¹⁸¹ T¹¹⁸² T¹¹⁸³ T¹¹⁸⁴ T¹¹⁸⁵ T¹¹⁸⁶ T¹¹⁸⁷ T¹¹⁸⁸ T¹¹⁸⁹ T¹¹⁹⁰ T¹¹⁹¹ T¹¹⁹² T¹¹⁹³ T¹¹⁹⁴ T¹¹⁹⁵ T¹¹⁹⁶ T¹¹⁹⁷ T¹¹⁹⁸ T¹¹⁹⁹ T¹²⁰⁰ T¹²⁰¹ T¹²⁰² T¹²⁰³ T¹²⁰⁴ T¹²⁰⁵ T¹²⁰⁶ T¹²⁰⁷ T¹²⁰⁸ T¹²⁰⁹ T¹²¹⁰ T¹²¹¹ T¹²¹² T¹²¹³ T¹²¹⁴ T¹²¹⁵ T¹²¹⁶ T¹²¹⁷ T¹²¹⁸ T¹²¹⁹ T¹²²⁰ T


ActivInspire - Studio

File Edit View Insert Tools Help English spelling spag Page 6 of 10 Best Fit

Comic Sans MS 38 B I U T² T₂

Wednesday 5th May

Complex sentences



for fun quiz

15:43 28/04/2021

Links:


<https://www.youtube.com/watch?v=3weU3tST3EM>

<https://ohmy.disney.com/quiz/2017/03/29/quiz-guess-dominant-personality-island/>

ActivInspire - Studio

File Edit View Insert Tools Help English spelling spag Page 7 of 10 Best Fit

Comic Sans MS 38 B I U T² T₂



Riley loves her family very much. She spends a lot of time with them having fun playing hockey which is their favourite sport. She thinks her dad, who likes to make her laugh, is the funniest person ever! They play outside in the sunshine if they have gotten all of their work done. One of their favourite things to do is to jump all day on the large, circular trampoline until they feel dizzy. Riley has lots of memories of family holidays and trips where they travelled in their yellow family car, some journeys were quite long but they didn't mind so long as they were together.

Next Page

15:44 28/04/2021

Task: Analyse sentence structure.

Riley loves her family very much. She spends a lot of time with them having fun playing hockey which is their favourite sport. She thinks her dad, who likes to make her laugh, is the funniest person ever! They play outside in the sunshine if they have gotten all of their work done. One of their favourite things to do is to jump all day on the large, circular trampoline until they feel dizzy. Riley has lots of memories of family holidays and trips where they travelled in their yellow family car, some journeys were quite long but they didn't mind so long as they were together.

- Embedded clause
- Short statement
- extra information
- complex sentence

Friday 7th May
To use complex sentences

Recap last lesson.

Extend and improve my ideas.

I had a sandwich. It was peanut butter.

ActivInspire - Studio

File Edit View Insert Tools Help English spelling spag Page 10 of 10 Best Fit

Comic Sans MS 38 B I U T¹ T₁

example

Choose 3 islands to represent you.

You are going to write about one of them including complex sentences.

Remember it's about YOU so keep ideas personal.

15:45 28/04/2021

ActivInspire - Studio

File Edit View Insert Tools Help English spelling spag Page 1 of 4 Best Fit

Comic Sans MS 38 B I U T¹ T₁

Wednesday 5th May

spelling

practise and weekly test

Y3 Half Term 4
address
busy
business
heart
fruit
strange
complete
extreme
forwards
know

15:45 28/04/2021

ActivInspire - Studio

File Edit View Insert Tools Help English * spelling spag * Page 2 of 4 Best Fit

Comic Sans MS 38 B I U T² T₂ [Color] [Background Color] [Bulleted List] [Numbered List] [Decrease Indent] [Increase Indent] [Align Left] [Align Center] [Align Right] [Justify] [Link] [Unlink] [Table] [Table of Contents] [Find] [Find and Replace] [Spell Check] [Sum]

SPAG

<u>Etymology:</u>	<u>Prefix:</u>	<u>Root word:</u>	<u>Suffix:</u>
<u>Word:</u> obeyed		<u>Opposite:</u>	
<u>Definition:</u>		<u>Synonyms:</u>	
<u>Put it in a sentence:</u> Remember ABC ●			

Windows taskbar: 15:45 28/04/2021

Etymology:

Prefix:

Root word:

Suffix:

Word:

Opposite:

Definition:

Synonyms:

Put it in a sentence: Remember ABC



ActivInspire - Studio

File Edit View Insert Tools Help English * spelling spag * Page 3 of 4 Best Fit

Friday 7th May

Anagrams

1. A short sleep during the day.	Something to cook with.
2. An animal that people ride.	The place where land meets sea.
3. Something you bake.	Hair on your face.
4. A place to see art.	Something that makes you sneeze.
5. Another word for jump.	Another word for white.
6. An animal that lives in a pack.	Move like water.
7. A dogs feet.	An insect that stings.
8. A place to wash dishes.	What covers your body.
9. The past tense of leap.	Something to serve food on.
10. A sour fruit.	A juicy fruit.

Windows taskbar: 15:46 28/04/2021

- | | |
|------------------------------------|----------------------------------|
| 1. A short sleep during the day. | Something to cook with. |
| 2. An animal that people ride. | The place where land meets sea. |
| 3. Something you bake. | Hair on your face. |
| 4. A place to see art. | Something that makes you sneeze. |
| 5. Another word for jump. | Another word for white. |
| 6. An animal that lives in a pack. | Move like water. |
| 7. A dogs feet. | An insect that stings. |
| 8. A place to wash dishes. | What covers your body. |
| 9. The past tense of leap. | Something to serve food on. |
| 10. A sour fruit. | A juicy fruit. |